



## EXAM PAPERS PRACTICE

Boost your performance and confidence with these topic-based exam questions

Practice questions created by actual examiners and assessment experts

Detailed mark scheme

Suitable for all boards

Designed to test your ability and thoroughly prepare you

Level: CIE IGCSE Geography

Subject: Geography

Topic: IGCSE Geography

Type: Topic Question

2002



1583

Geography CIE IGCSE

To be used for all exam preparation for 2025+

---

# GEOGRAPHY

# IGCSE

## Key skills

---

## Paper 1

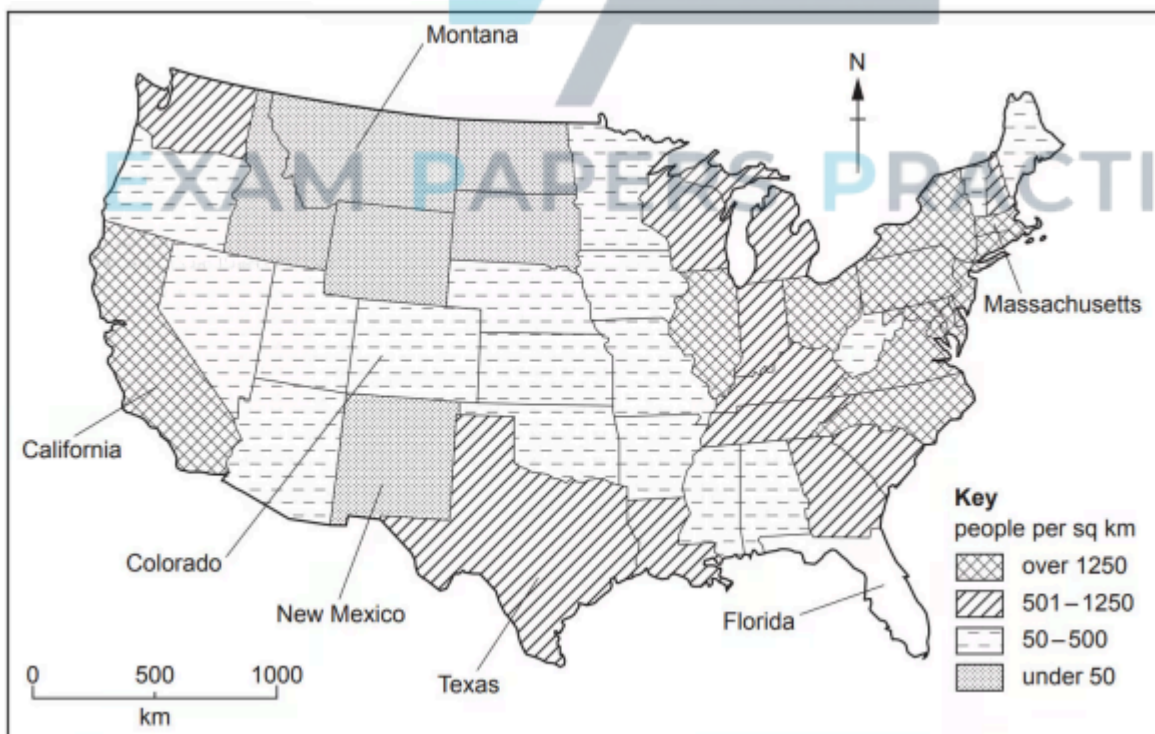
### Question 1

Suggest how physical factors affect population density

[4 marks]

### Question 2

Study Fig.1.1, which is a map showing population density in mainland USA



Explain how economic factors can influence population density.

[4 marks]



### Question 3

Look again at Fig.1.1 along with Figs.1.2 and 1.3, which show information about relief and climate in the USA.

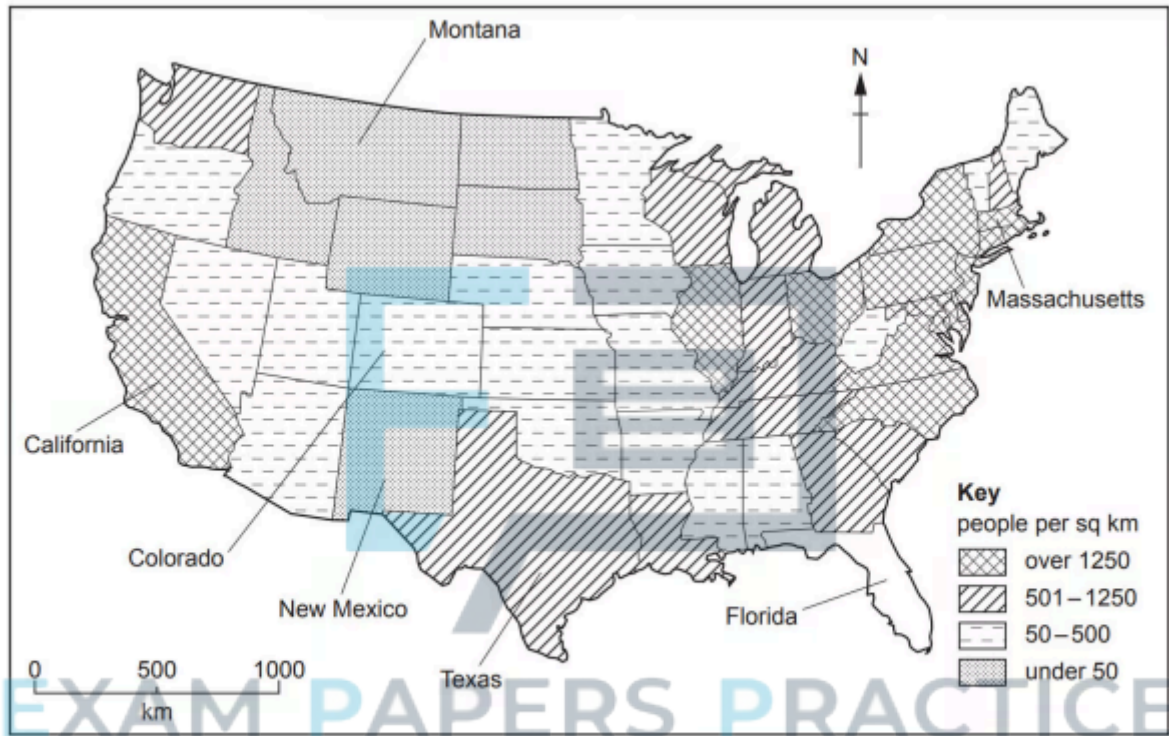


Fig.1.1

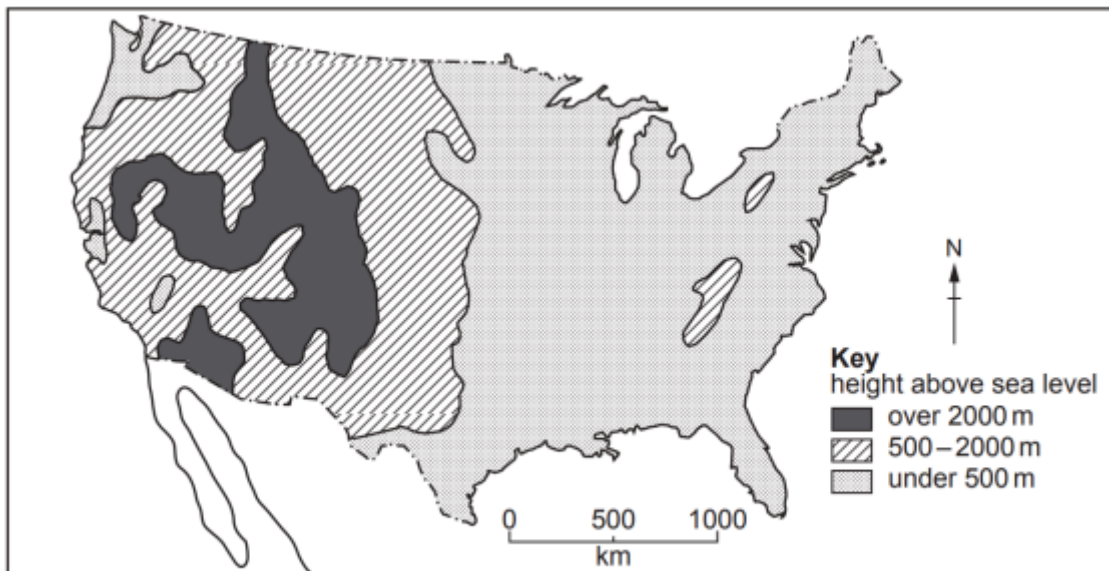


Fig. 1.2



Climate of the USA

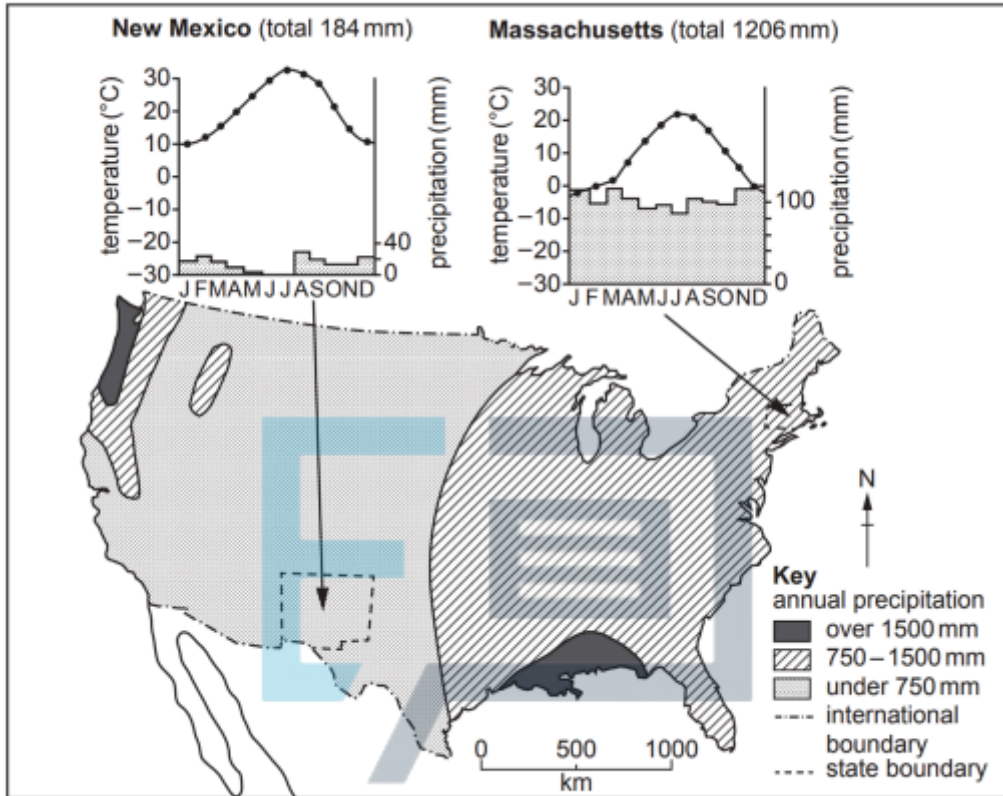


Fig. 1.3

Using Figs.1.1 and 1.3 only, suggest reasons for the difference in population density between New Mexico and Massachusetts. Use statistics in your answer.

[5 marks]





Question 4

Study Fig.1.1 and Fig.1.2, which show information about population density and economic activity in Honduras (an LEDC in Central America).

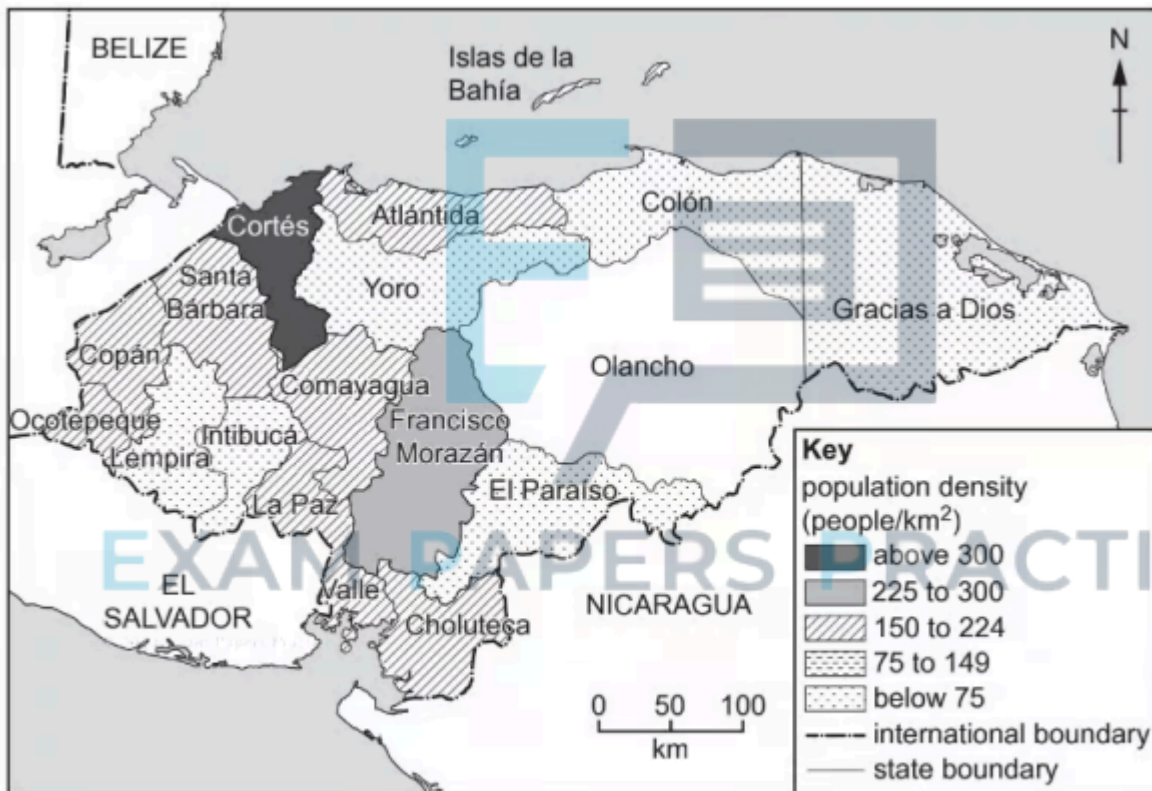


Fig. 1.1



0 50 100  
km

Copyright  
© 2024 Exam Papers Practice

**Key**

- food processing
- drinks
- footwear and clothing
- textiles
- wood products
- furniture

**Mining**

- Ag silver and gold
- Pb lead and zinc

- Yoro city
- river

**Manufacturing**

- chemical products
- tobacco processing
- palm oil
- cement
- oil refining

**Agriculture**

- B bananas
- cattle
- K coffee
- C cotton
- T tobacco

Fig. 1.2

Explain how physical factors can influence population density.

[4 marks]



Question 5



Fig. 1.3

Suggest reasons why many coastal lowland areas, such as the area shown in Fig.1.3, have a high population density.

[4 marks]

## Paper 2

### Question 1

Study Fig 1, which shows a rural area  
Suggest why this area has low population density



Fig 1 – A rural area

[3 marks]