



## EXAM PAPERS PRACTICE

Boost your performance and confidence with these topic-based exam questions

Practice questions created by actual examiners and assessment experts

Detailed mark scheme

Suitable for all boards

Designed to test your ability and thoroughly prepare you

Level: CIE IGCSE Geography

Subject: Geography

Topic: IGCSE Geography

Type: Topic Question

2002



1583

Geography CIE IGCSE

To be used for all exam preparation for 2025+

---

# GEOGRAPHY

# IGCSE

## Key skills

---



## Paper 1

### Question 1

Study Fig. 6.2, which shows information about the fish processing industry.

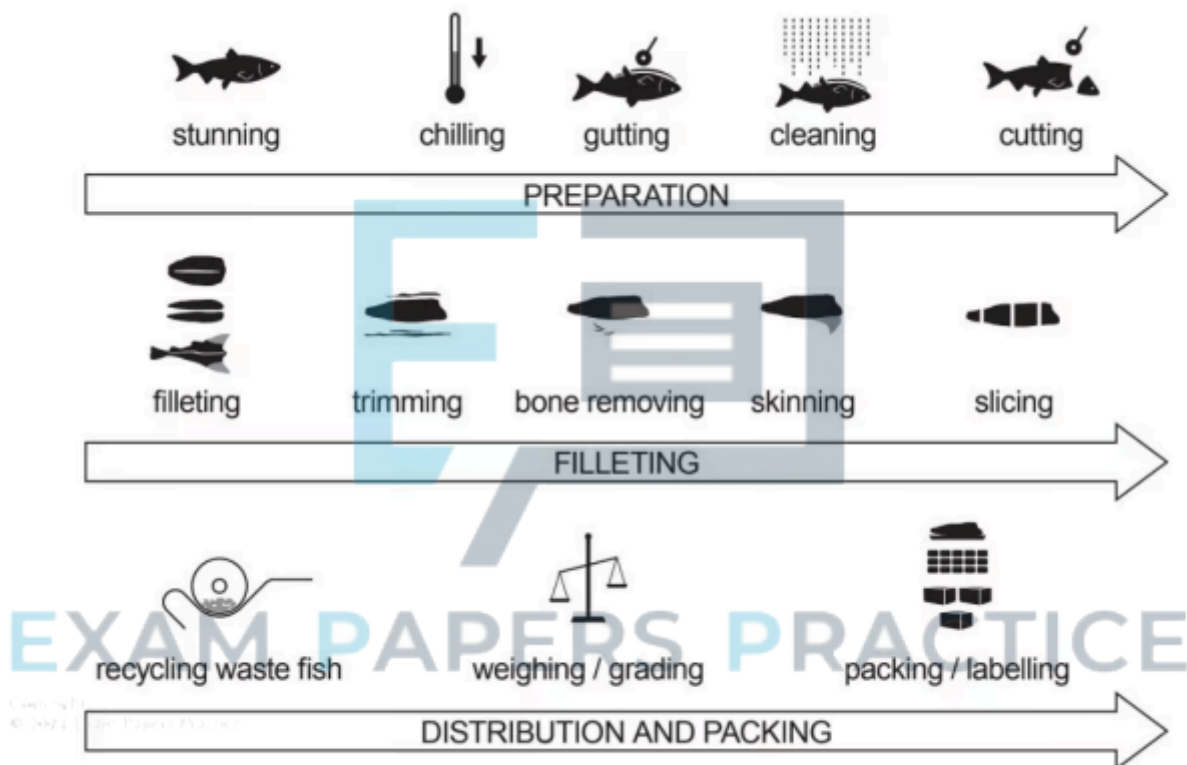


Fig. 6.2



- (i) Complete the table below by inserting the following words to show examples of inputs, processes and outputs of the fish processing industry shown in Fig. 6.2.

electricity	removing bones	weighing portions
packets of frozen fish	fish skin	water

Inputs	Processes	Outputs
.....	.....	.....
.....	.....	.....

[3]

- (ii) Explain how the local natural environment may be at risk from industries such as fish processing.

[5]

EXAM PAPERS PRACTICE [8 marks]

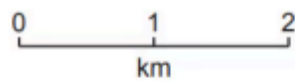


### Question 2



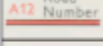



Study Fig. 5.2, which shows the area around Limuru, Kenya.



EXAM PAPERS PRACTICE



#### Key

-  town or area with permanent buildings
-  other populated area, houses
-  all-weather road – bound surface
-  all-weather road – loose surface
-  main track (motorable)
-  other track and footpath
-  railway, station, level crossing
-  power line



EXAM PAPERS PRACTICE



(i) Suggest why the tea factory four kilometres east of Limuru is located close to the tea plantations.

[3]

(ii) Using evidence from Fig. 5.2 **only**, suggest reasons for the location of the shoe factory one kilometre north of Limuru.

[5]

[8 marks]



### Question 3

Study Fig. 6.2 (Insert), which shows information about the location of selected manufacturing industries in Italy.

EXAM PAPERS PRACTICE

Copyright  
© 2024 Exam Papers Practice



Fig. 6.2

- (i) Compare the importance of manufacturing industry in north and south Italy.
- (ii) Explain how manufacturing industry may increase the rate of global warming.

[3]

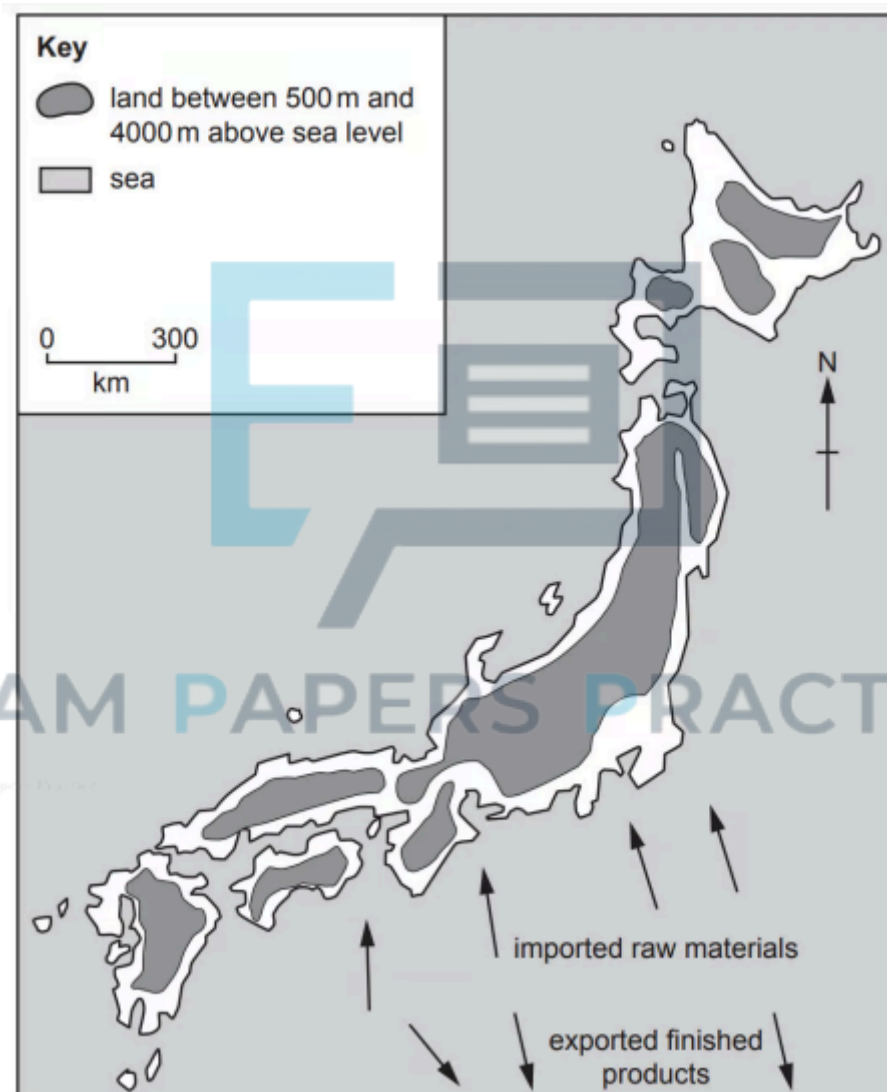
[5]

[8 marks]

**Paper 2**

**Question 1**

Fig. 6.2 shows Japan's relief, imports and exports.



**Fig. 6.2**

Using evidence from Figs. 6.1 and 6.2 only, explain the factors which have influenced the location of industrial regions in Japan.

[4]



### Information about industry in Japan

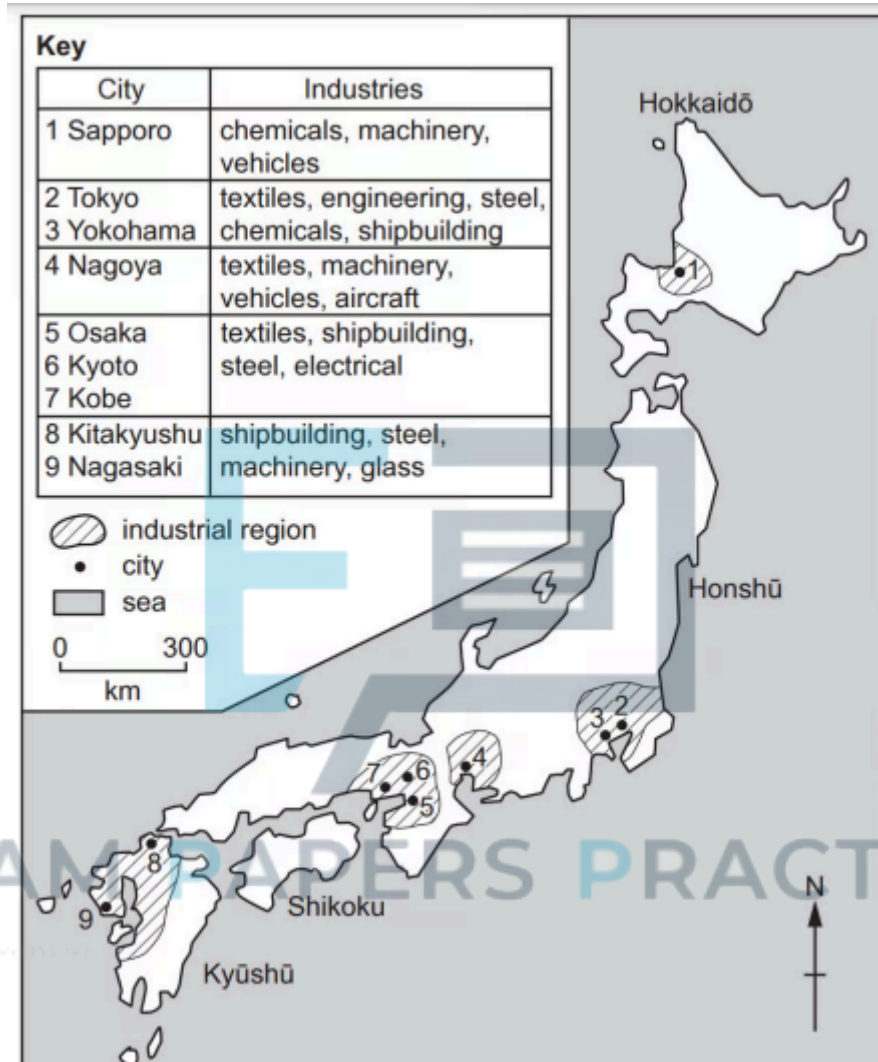


Fig. 6.1

[4 marks]