



## EXAM PAPERS PRACTICE

Boost your performance and confidence with these topic-based exam questions

Practice questions created by actual examiners and assessment experts

Detailed mark scheme

Suitable for all boards

Designed to test your ability and thoroughly prepare you

Level: CIE IGCSE Geography

Subject: Geography

Topic: IGCSE Geography

Type: Topic Question

2002



1583

Geography CIE IGCSE

To be used for all exam preparation for 2025+

---

# GEOGRAPHY

# IGCSE

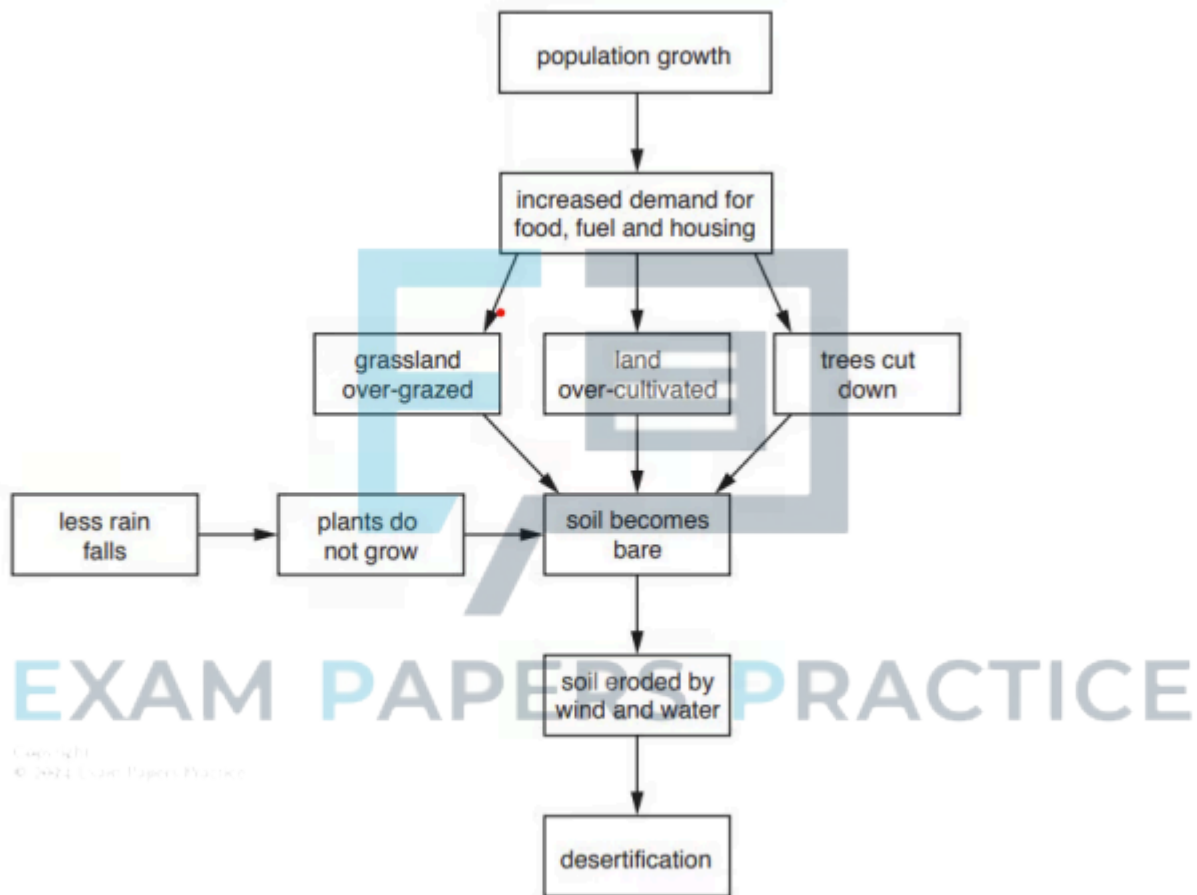
## Key skills

---

**Paper 1**

**Question 1**

Study Fig. 6.1, which shows information about desertification.



**Fig. 6.1**

State two methods which people in rural areas of LEDCs could use to reduce desertification.

For each of your chosen methods, explain why you think it will be successful.

[4]  
[4 marks]



Question 2

Study Fig. 6.1, which shows information about threats to the natural environment in the Caspian Sea

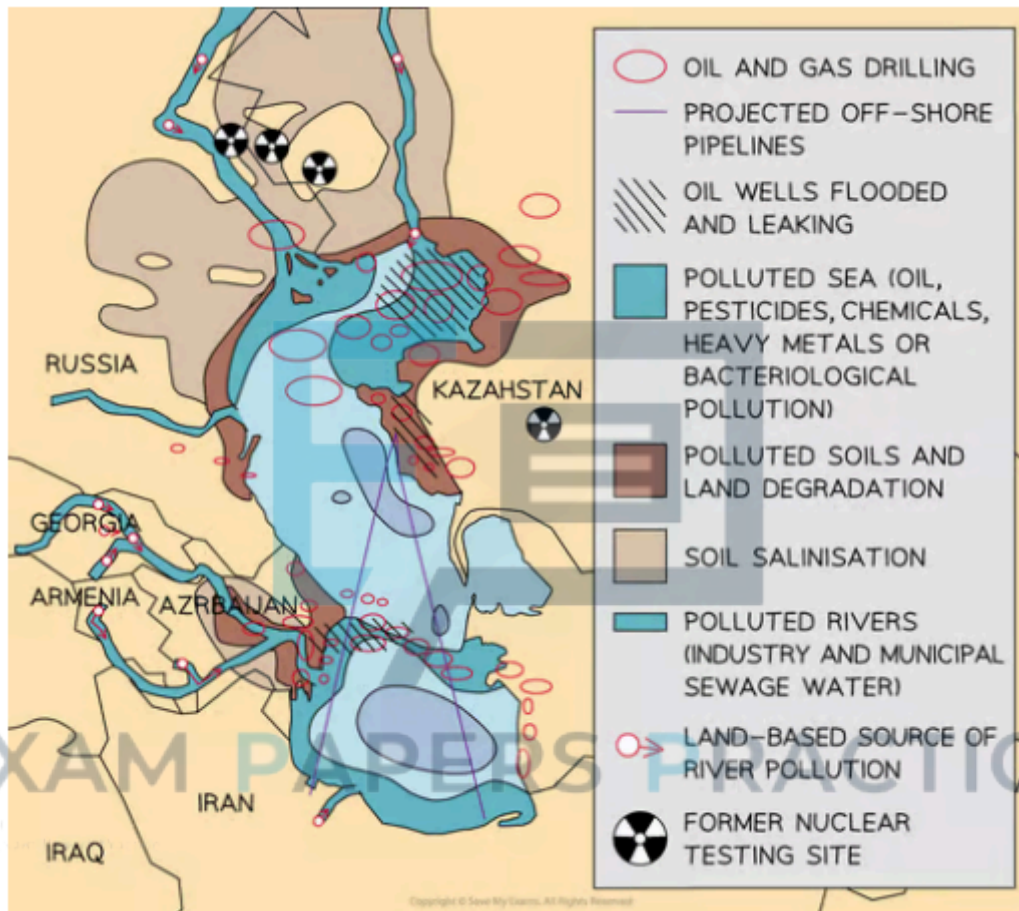


Fig 6.1

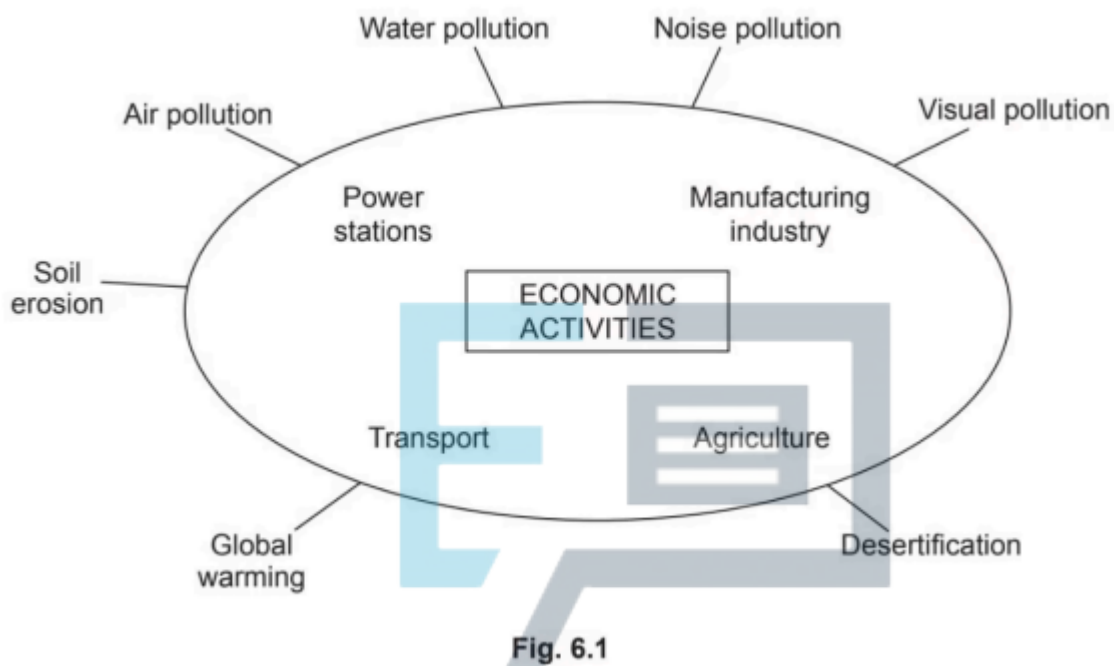
Suggest why it is difficult to reduce water pollution in the Caspian Sea.

[4]

[4 marks]

**Question 3**

Study Fig. 6.1, which shows information about economic activities and threats to the natural environment.



Explain how the economic activities shown in Fig. 6.1 may cause global warming.

EXAM PAPERS PRACTICE

[4]

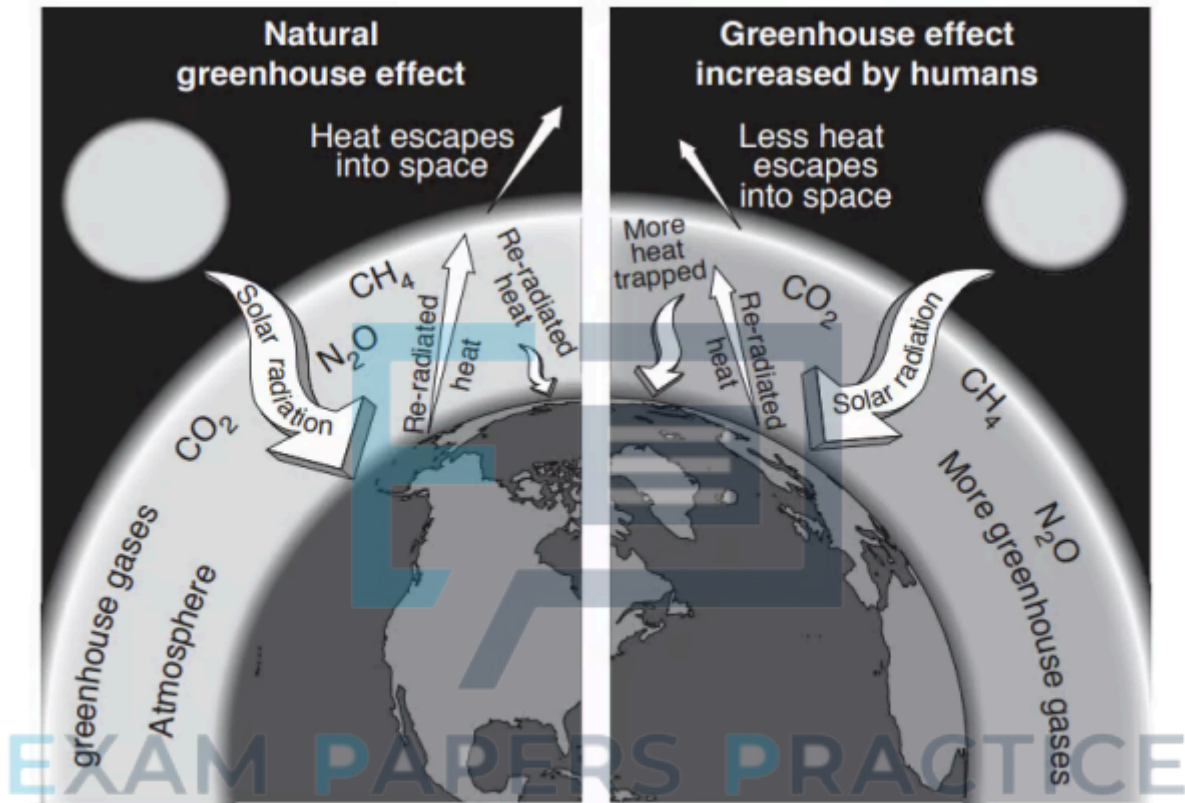
Copyright © 2024 Exam Papers Practice

[4 marks]



Question 4

Study Fig. 6.2, which shows information about human influence on the greenhouse effect.



Copyright © 2024 Exam Papers Practice

Fig. 6.2

Explain why greenhouse gases are building up in the atmosphere.

[5]

[5 marks]

**Question 5**

Study Figs. 6.2, 6.3 and 6.4, which are photographs of economic activities which increase greenhouse gases in the atmosphere.



**Fig 6.2**



EXAM PAPERS PRACTICE



EXAM PAPERS PRACTICE Fig 6.3

Copyright  
© 2024 Exam Papers Practice



Fig 6.4

Explain how an increase in greenhouse gases in the atmosphere is causing global warming.

EXAM PAPERS PRACTICE

[5]

[5 marks]

Copyright  
© 2024 Exam Papers Practice

### Question 6

Study Fig. 6.2, which shows advice about conservation of natural resources.





EXAM PAPERS PRACTICE



Fig. 6.2

Explain the importance of conserving natural resources and the natural environment.

[5]

[5 marks]

EXAM PAPERS PRACTICE

Copyright  
© 2024 Exam Papers Practice

### Question 7

Study Fig. 6.2, which shows information about desertification in Northern Africa.

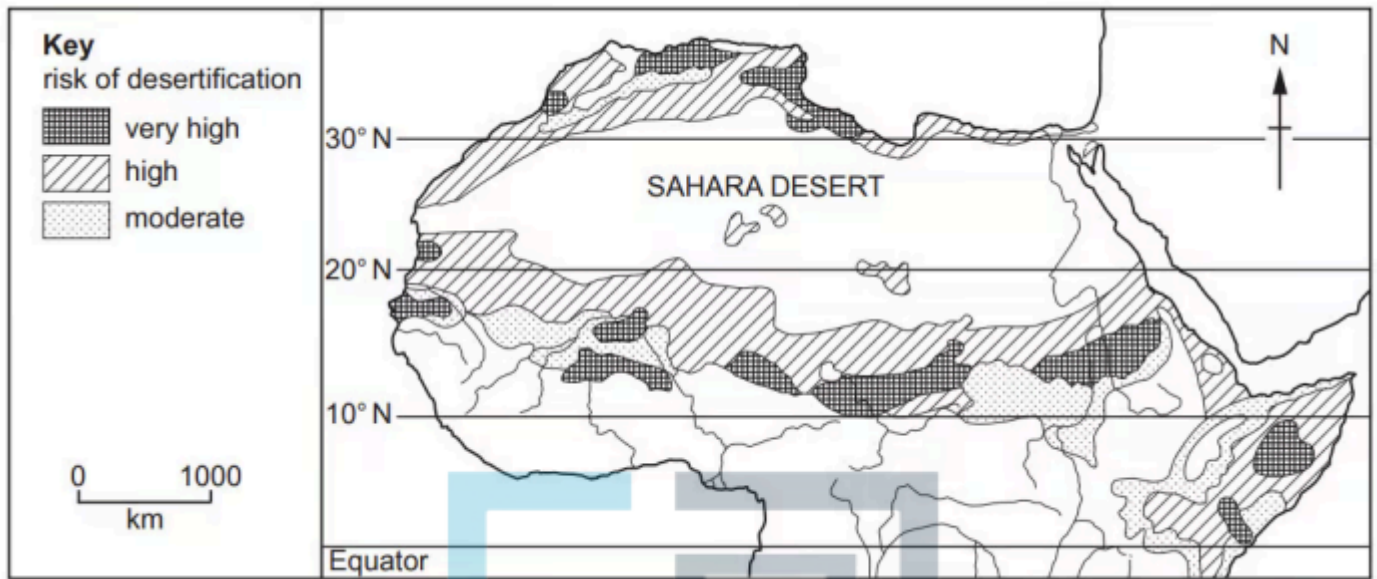


Fig. 6.2

Describe the impacts of desertification on local people.

[5]

[5 marks]



## Paper 2

### Question 1

Study Fig. 6.2, which shows information about desertification in Northern Africa.

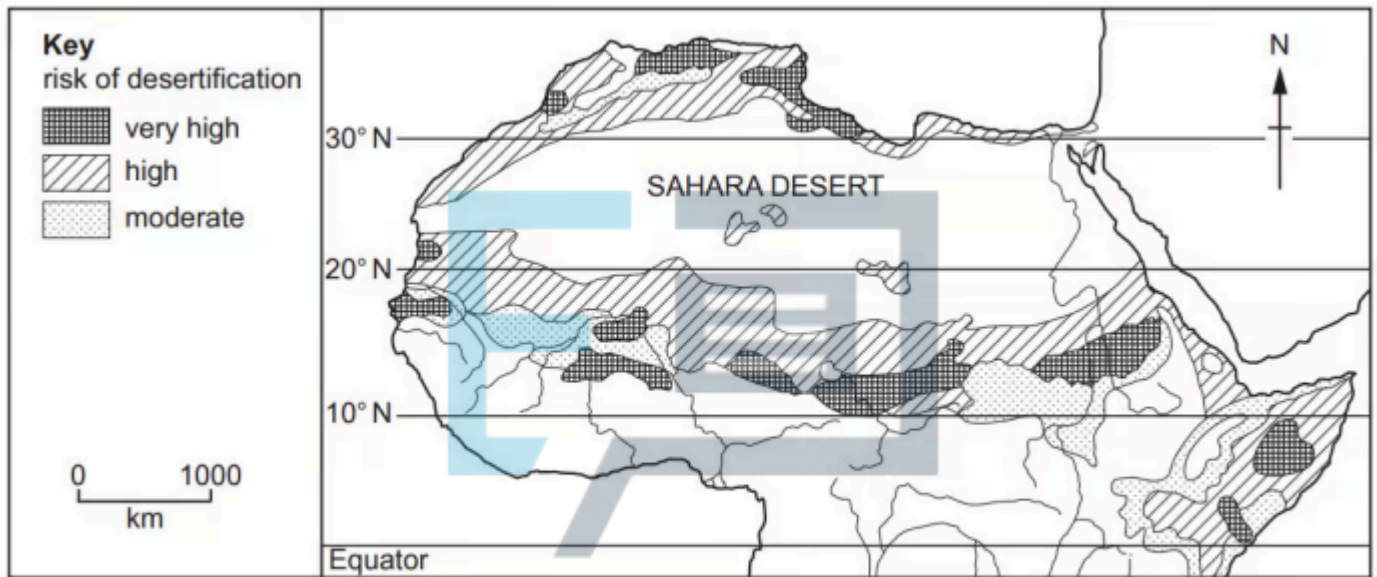


Fig. 6.2

Describe the impacts of desertification on local people.

[5]

[5 marks]