

Please check the examination details below before entering your candidate information

Candidate surname

Other names

Centre Number

Candidate Number

--	--	--	--	--

--	--	--	--	--

Pearson Edexcel International GCSE (9–1)

Tuesday 11 June 2024

Morning (Time: 1 hour 15 minutes)

Paper
reference

4CH1/2CR

Chemistry

UNIT: 4CH1

PAPER: 2CR

You must have:

Calculator, ruler

Total Marks

Instructions

- Use **black** ink or ball-point pen.
- **Fill in the boxes** at the top of this page with your name, centre number and candidate number.
- Answer **all** questions.
- Answer the questions in the spaces provided
– *there may be more space than you need.*
- Show all the steps in any calculations and state the units.

Information

- The total mark for this paper is 70.
- The marks for **each** question are shown in brackets
– *use this as a guide as to how much time to spend on each question.*

Advice

- Read each question carefully before you start to answer it.
- Write your answers neatly and in good English.
- Try to answer every question.
- Check your answers if you have time at the end.

Turn over ►

P73426A

©2024 Pearson Education Ltd.
E:1/1/1/1/1/




Pearson

The Periodic Table of the Elements

1	2	3	4	5	6	7	0	
7 Li lithium 3	9 Be beryllium 4	23 Na sodium 11	24 Mg magnesium 12	39 K potassium 19	40 Ca calcium 20	85 Rb rubidium 37	133 Cs caesium 55	4 He helium 2
112 Cd cadmium 48	111 Rg roentgenium 111	110 Ds darmstadtium 110	109 Mt meitnerium 109	108 Hs hassium 108	107 Bh bohrium 107	106 Sg seaborgium 106	105 Db dubnium 105	104 Rf rutherfordium 104
103 Rh rhodium 45	102 Pd palladium 46	101 Ru ruthenium 44	100 Tc technetium 43	99 Zr zirconium 40	98 Nb niobium 41	97 Mo molybdenum 42	96 Ta tantalum 73	95 Hf hafnium 72
95 Co cobalt 27	94 Ni nickel 28	93 Fe iron 26	92 Mn manganese 25	91 V vanadium 23	90 Cr chromium 24	89 Y yttrium 39	88 Sr strontium 38	87 Fr francium 87
82 Pb lead 82	81 Tl thallium 81	80 Hg mercury 80	79 Au gold 79	78 Pt platinum 78	77 Ir iridium 77	76 Os osmium 76	75 Re rhenium 75	74 W tungsten 74
73 Ge germanium 32	72 As arsenic 33	71 Sb antimony 51	70 Sn tin 50	69 Cd cadmium 48	68 Ag silver 47	67 Pd palladium 46	66 Rh rhodium 45	65 Pt platinum 78
63.5 Cu copper 29	63 Zn zinc 30	62 Ni nickel 28	61 Co cobalt 27	60 Fe iron 26	59 Mn manganese 25	58 Cr chromium 24	57 V vanadium 23	56 Ti titanium 22
54 Xe xenon 54	53 I iodine 53	52 Te tellurium 52	51 Sb antimony 51	50 Sn tin 50	49 In indium 49	48 Cd cadmium 48	47 Ag silver 47	46 Pd palladium 46
40 Ar argon 18	39 K potassium 19	38 Sr strontium 38	37 Rb rubidium 37	36 Kr krypton 36	35 Br bromine 35	34 Se selenium 34	33 As arsenic 33	32 Ge germanium 32
35.5 Cl chlorine 17	34 S sulfur 16	33 P phosphorus 15	32 Si silicon 14	31 Al aluminum 13	30 Zn zinc 30	29 Cu copper 29	28 Ni nickel 28	27 Co cobalt 27
20 Ne neon 10	19 F fluorine 9	18 Ar argon 18	17 Cl chlorine 17	16 O oxygen 8	15 N nitrogen 7	14 C carbon 6	13 Al aluminum 13	12 Si silicon 14
10 Ne neon 10	9 F fluorine 9	8 O oxygen 8	7 N nitrogen 7	6 C carbon 6	5 B boron 5	4 Be beryllium 4	3 Li lithium 3	2 He helium 2
Elements with atomic numbers 112–116 have been reported but not fully authenticated								1 H hydrogen 1

Key
relative atomic mass
atomic symbol
name
atomic (proton) number

* The lanthanoids (atomic numbers 58–71) and the actinoids (atomic numbers 90–103) have been omitted.

The relative atomic masses of copper and chlorine have not been rounded to the nearest whole number.



DO NOT WRITE IN THIS AREA

DO NOT WRITE IN THIS AREA

DO NOT WRITE IN THIS AREA

DO NOT WRITE IN THIS AREA

DO NOT WRITE IN THIS AREA

DO NOT WRITE IN THIS AREA

BLANK PAGE

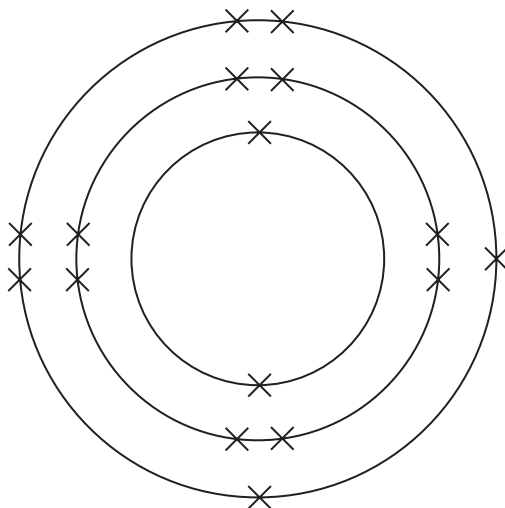


Answer ALL questions.

Some questions must be answered with a cross in a box . If you change your mind about an answer, put a line through the box and then mark your new answer with a cross .

1 This question is about sulfur.

(a) The diagram represents the electronic configuration of an atom of sulfur.



(i) Which period of the Periodic Table contains sulfur?

(1)

- A 2
- B 3
- C 4
- D 6

(ii) What is the charge on a sulfide ion?

(1)

- A 1+
- B 2+
- C 1-
- D 2-



DO NOT WRITE IN THIS AREA

DO NOT WRITE IN THIS AREA

DO NOT WRITE IN THIS AREA

(b) When a mixture of sulfur and zinc is heated to a high temperature a reaction occurs, forming the compound zinc sulfide, ZnS

(i) Give a reason why the mixture of sulfur and zinc needs heating before a reaction occurs.

(1)

(ii) Calculate the relative formula mass (M_r) of zinc sulfide.

[for Zn, $A_r = 65$ for S, $A_r = 32$]

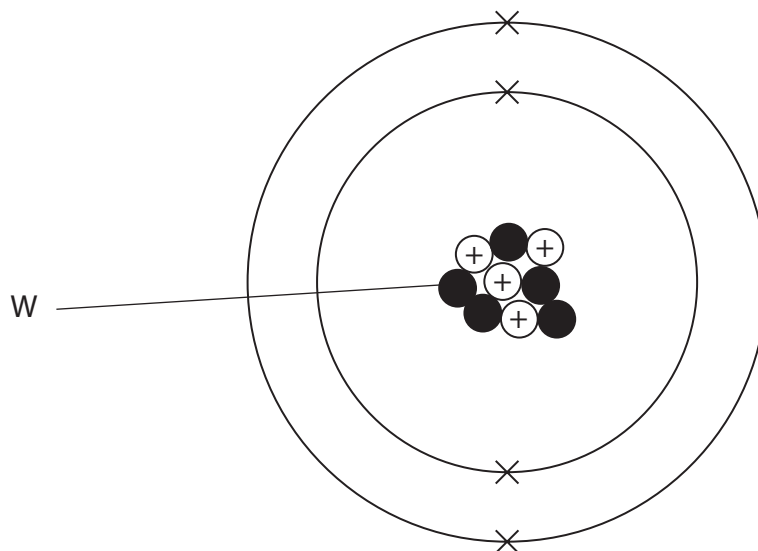
(1)

$M_r =$

(Total for Question 1 = 4 marks)



2 (a) The diagram represents an atom of an element.



(i) What is the name of the particle labelled W?

(1)

- A** electron
- B** ion
- C** neutron
- D** proton

(ii) What is the mass number of this atom?

(1)

- A** 4
- B** 5
- C** 9
- D** 13



DO NOT WRITE IN THIS AREA

DO NOT WRITE IN THIS AREA

DO NOT WRITE IN THIS AREA

(b) These are the symbols for the two isotopes of lithium.



(i) In terms of sub-atomic particles, give one similarity and one difference between the two isotopes.

(2)

similarity

.....

.....

difference

.....

.....

(ii) A sample of lithium contains 7.5% of ${}^6_3\text{Li}$ and 92.5% of ${}^7_3\text{Li}$

Calculate the relative atomic mass (A_r) of this sample of lithium.

(2)

$A_r =$

(Total for Question 2 = 6 marks)

.....

.....

.....

.....

.....



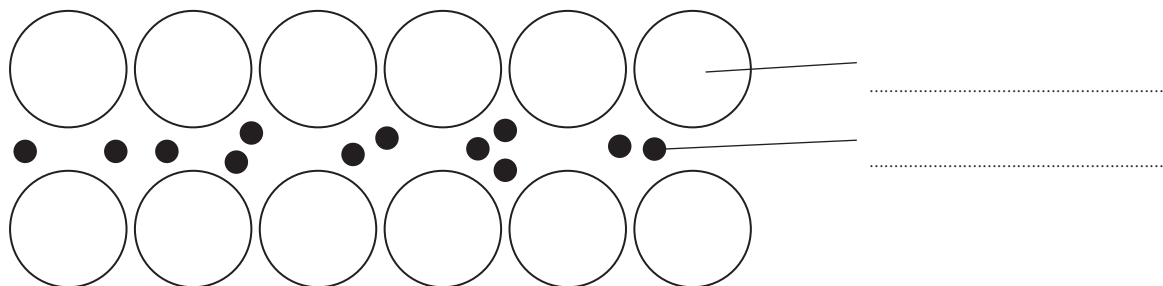
P 7 3 4 2 6 A 0 7 2 4

3 This question is about magnesium metal and its compounds.

(a) (i) The diagram represents the structure of magnesium.

Complete the diagram by adding the labels.

(2)



(ii) Explain why magnesium is malleable.

(2)

.....

.....

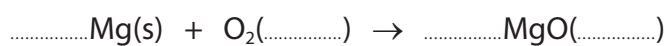
.....

.....

(b) Magnesium burns in oxygen gas to form solid magnesium oxide.

(i) Complete the chemical equation for the reaction by balancing the equation and adding the state symbols.

(2)



(ii) Give a reason why magnesium is oxidised in this reaction.

(1)

.....

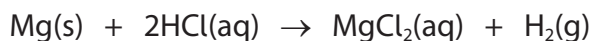
.....



(c) A student uses this method to make a solution of magnesium chloride.

- Step 1 measure 25 cm³ of dilute hydrochloric acid into a beaker
- Step 2 add magnesium powder a little at a time
- Step 3 keep adding magnesium powder until it is in excess
- Step 4 remove the excess magnesium powder by filtration

This is the equation for the reaction.



- (i) Give a reason why the student uses magnesium powder rather than magnesium ribbon.

(1)

- (ii) Give a reason why the student adds an excess of magnesium in step 3.

(1)

- (iii) Calculate the minimum mass of magnesium needed to react with 25.0 cm³ of 2.00 mol/dm³ hydrochloric acid.

[for Mg, $A_r = 24$]

(3)

mass = g

(Total for Question 3 = 12 marks)



P 7 3 4 2 6 A 0 9 2 4

4 This question is about the manufacture of ethanol by the fermentation of glucose.

(a) Fermentation needs to be done in the absence of air.

Give **two** other conditions needed for fermentation.

(2)

1

2

(b) Explain why fermentation needs to be done in the absence of air.

(2)

.....

.....

.....

.....

(c) (i) Complete the equation for fermentation.

(1)



(ii) A mixture containing 500 mol of glucose is fermented.

A mass of 5750 g of ethanol is obtained.

Calculate the percentage yield.

[for ethanol, $M_r = 46$]

(3)

percentage yield = %

(Total for Question 4 = 8 marks)



DO NOT WRITE IN THIS AREA

DO NOT WRITE IN THIS AREA

DO NOT WRITE IN THIS AREA

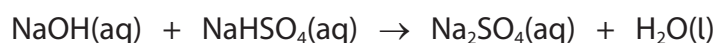
BLANK PAGE



P 7 3 4 2 6 A 0 1 1 2 4

- 5 Sodium sulfate can be prepared by the reaction between sodium hydroxide solution and sodium hydrogensulfate (NaHSO₄) solution.

This is the equation for the reaction.



Sodium hydrogensulfate solution is acidic.

A student adds 25.0 cm³ of sodium hydroxide solution to a conical flask and adds two drops of indicator.

The student does a titration.

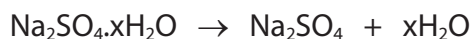
- (a) (i) Name a piece of apparatus that should be used to add 25.0 cm³ of sodium hydroxide solution to the conical flask. (1)

- (ii) Describe the method the student should use to find the accurate volume of sodium hydrogensulfate solution needed to neutralise the 25.0 cm³ of sodium hydroxide solution. (5)

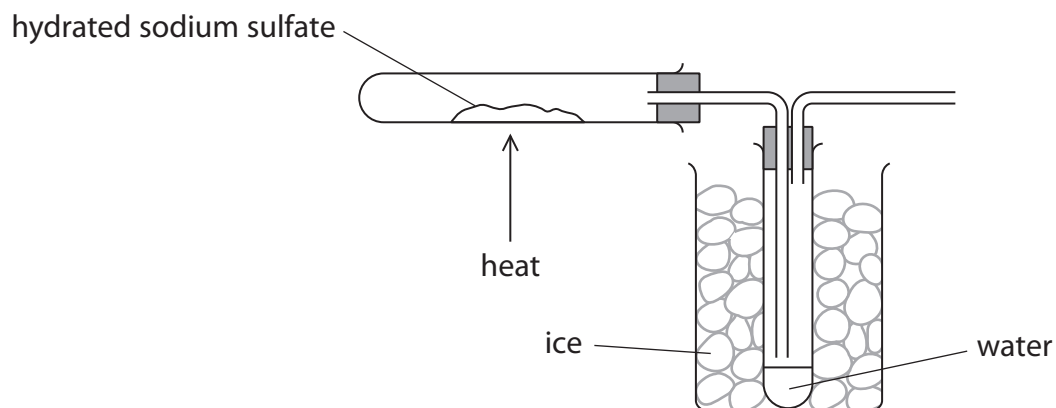


(c) Crystals of hydrated sodium sulfate decompose when heated.

This is the equation for the decomposition.



A student uses this apparatus to find the value of x .



The student heats the crystals until the decomposition is complete.

The table shows the student's results.

mass of empty test tube in g	25.12
mass of test tube and $\text{Na}_2\text{SO}_4 \cdot x\text{H}_2\text{O}$ in g	31.56
mass of test tube and Na_2SO_4 in g	27.96

Use the results to calculate the value of x .

[for Na_2SO_4 , $M_r = 142$ for H_2O , $M_r = 18$]

(4)

value of $x = \dots\dots\dots$

(Total for Question 5 = 14 marks)



DO NOT WRITE IN THIS AREA

DO NOT WRITE IN THIS AREA

DO NOT WRITE IN THIS AREA

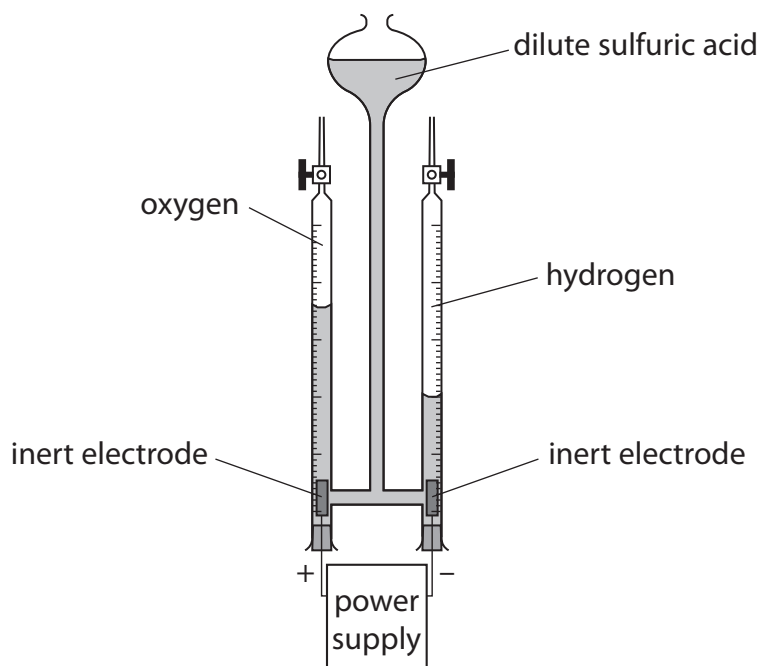
BLANK PAGE



P 7 3 4 2 6 A 0 1 5 2 4

6 This question is about electrolysis.

(a) This apparatus is used to collect the gases produced when an electric current passes through dilute sulfuric acid.



(i) Name a suitable material for the inert electrodes.

(1)

(ii) Give a test to show that the gas produced at the positive electrode is oxygen.

(1)

(iii) Give a test to show that the gas produced at the negative electrode is hydrogen.

(1)



(iv) Give an ionic half-equation for the formation of hydrogen at the negative electrode.

(1)

(v) The oxygen gas in the tube has a volume of 17.8 cm^3 at rtp.

Calculate the mass, in grams, of oxygen gas in the tube.

Give your answer to 3 significant figures.

[for O_2 at rtp, molar volume = $24\,000 \text{ cm}^3$]

(3)

mass of oxygen = g

DO NOT WRITE IN THIS AREA

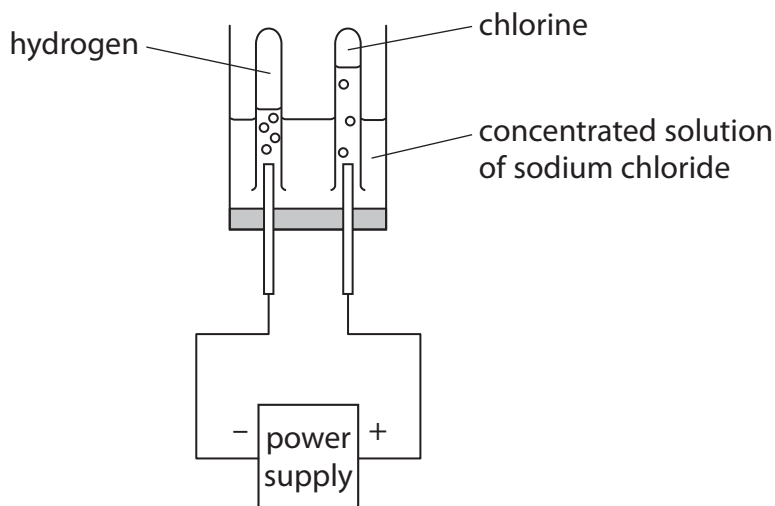
DO NOT WRITE IN THIS AREA

DO NOT WRITE IN THIS AREA



P 7 3 4 2 6 A 0 1 7 2 4

(b) This apparatus is used to electrolyse a concentrated solution of sodium chloride.



(i) Give a reason why sodium chloride solution conducts electricity.

(1)

(ii) The positive ions in the solution are H^+ and Na^+ .

Give a reason why hydrogen forms at the negative electrode rather than sodium.

(1)

(iii) A sample of the solution is taken from near the negative electrode. The sample is tested with universal indicator.

Explain the final colour of the universal indicator.

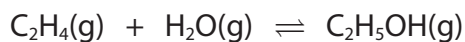
(2)

(Total for Question 6 = 11 marks)



7 Gaseous ethanol is manufactured by reacting ethene gas with steam.

This is the equation for the reaction.



- (a) (i) The pressure on an equilibrium mixture of the three gases is decreased. All the other conditions are kept the same.

Predict the effect of this change on the yield of ethanol at equilibrium, giving a reason for your answer.

(2)

.....

.....

.....

.....

- (ii) Predict the effect of adding a catalyst on the yield of ethanol at equilibrium, giving a reason for your answer.

(2)

.....

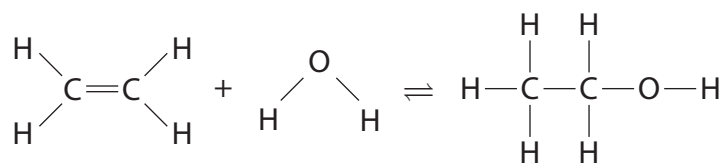
.....

.....

.....



(b) The equation shows the displayed formulae for the reactants and products.



The table gives the bond energies.

Bond	Bond energy in kJ/mol
C—H	414
C=C	614
O—H	463
C—C	346
C—O	358

(i) Using the data in the table and the equation, show that the enthalpy change, ΔH , is approximately -40 kJ/mol.

(3)

(ii) Explain, in terms of bonds broken and bonds made, why this reaction is exothermic.

(2)

.....

.....

.....

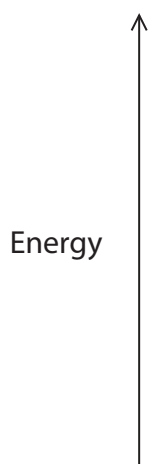
.....



(iii) Draw an energy level diagram for the reaction between ethene and steam.

Label the enthalpy change, ΔH .

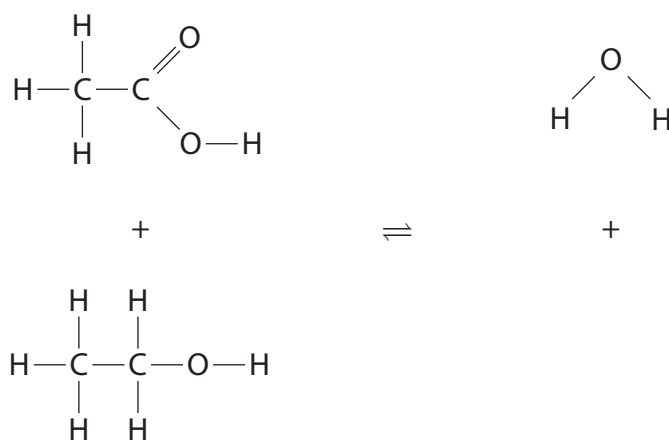
(3)



(c) Ethanoic acid reacts with ethanol to form ester A and water.

(i) Complete the equation by adding the displayed formula of ester A.

(2)



ester A

(ii) Give the name of ester A.

(1)

(Total for Question 7 = 15 marks)

TOTAL FOR PAPER = 70 MARKS



DO NOT WRITE IN THIS AREA

DO NOT WRITE IN THIS AREA

DO NOT WRITE IN THIS AREA

BLANK PAGE



DO NOT WRITE IN THIS AREA

DO NOT WRITE IN THIS AREA

DO NOT WRITE IN THIS AREA

BLANK PAGE



DO NOT WRITE IN THIS AREA

DO NOT WRITE IN THIS AREA

DO NOT WRITE IN THIS AREA

BLANK PAGE

