

SECTION A

Answer **all** the questions.

You should spend a maximum of 30 minutes on this section.




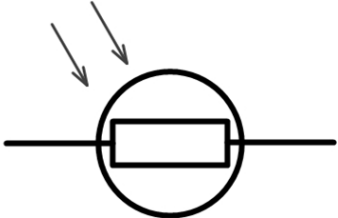
1 Which of these pairs of objects will attract each other?

- A   copper bar
- B  
- C  
- D   aluminium bar

Your answer

[1]

2 Which of these symbols is used to show an LDR?

- A 
- B 
- C 
- D 

Your answer

[1]

- 3 A bus takes 1.8 hours to travel 24 km.

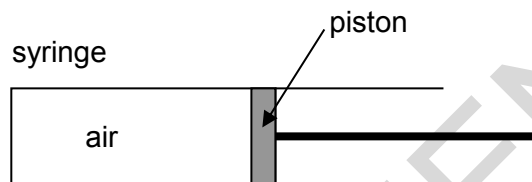
What is the average speed of the bus?

- A 43.2 km/h
 B 25.8 km/h
 C 22.2 km/h
 D 13.3 km/h

Your answer

[1]

- 4 A syringe contains air.



The piston is pushed inwards.

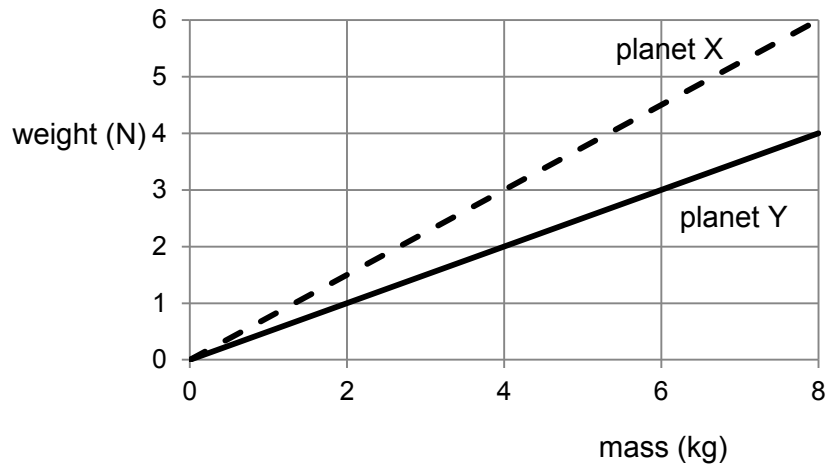
How do the pressure and volume of the air in the syringe change?

	Pressure	Volume
A	decreases	decreases
B	decreases	increases
C	increases	decreases
D	increases	increases

Your answer

[1]

- 5 The graph shows the relationship between mass and weight on two different planets.



The weight of an object on planet **X** is 3 N.

What is the weight of the same object on planet **Y**?

- A 1.5 N
- B 2.0 N
- C 4.0 N
- D 6.0 N

Your answer

[1]

- 6 The strength of the magnetic effect of a solenoid can be changed.

Which of the following rows correctly describes what happens to the strength when the current and number of turns are increased?

	Increased current	Increased number of turns
A	increases	decreases
B	increases	increases
C	decreases	increases
D	decreases	decreases

Your answer

[1]

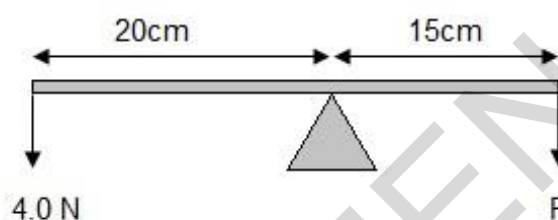
7 Why is an unmagnetised iron object attracted to a magnet?

- A The iron has magnetism induced by the magnet.
- B The iron has charged particles which attract the protons in the magnet.
- C The iron has charged particles which attract the electrons in the magnet.
- D The iron is attracted by the Earth's magnetic field.

Your answer

[1]

8 A see-saw is in equilibrium.



What force is needed for the see-saw to be in equilibrium?

- A 3.0 N
- B 3.5 N
- C 5.0 N
- D 5.3 N

Your answer

[1]

9 Which sentence is the definition of the power of a machine?

- A The amount of work done by the machine.
- B The efficiency of the machine.
- C The number of joules of energy the machine requires to work.
- D The rate at which energy is transferred by the machine.

Your answer

[1]

- 10 A sealed can contains gas.

The can is heated and the pressure of the gas increases.

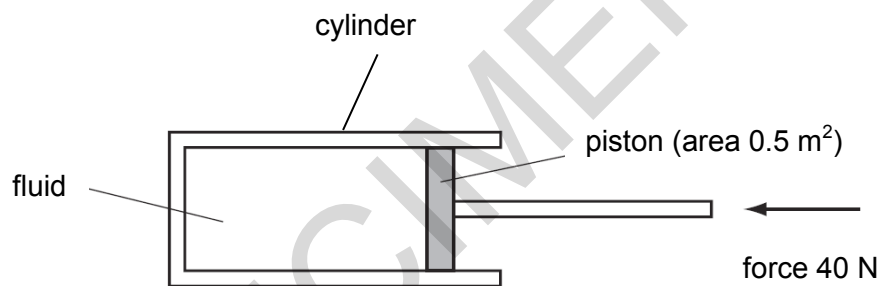
How do the gas particles cause this increase in pressure?

- A Their average distance apart increases.
- B They expand.
- C They hit each other more frequently.
- D They hit the can more frequently.

Your answer

[1]

- 11 A piston is pushed in a cylinder containing a fluid.



If **pressure = force ÷ area**, what is the pressure exerted on the fluid?

- A 20 Pa
- B 80 Pa
- C 160 Pa
- D 200 Pa

Your answer

[1]

12 A firework rocket has a resultant force of 2 N acting on it.

It has a mass of 0.1 kg.

What is the acceleration of the firework rocket?

- A 0.2 m/s²
- B 0.5 m/s²
- C 20 m/s²
- D 200 m/s²

Your answer

[1]

13 What is the **minimum** number of forces that are required to compress a spring?

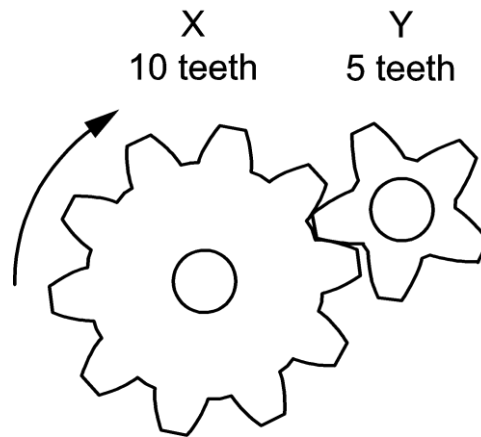
- A 1
- B 2
- C 3
- D 4

Your answer

[1]

SPECIMEN

- 14 The diagram shows 2 gears.



Gear X is rotated clockwise at 1.0 rotation per second.

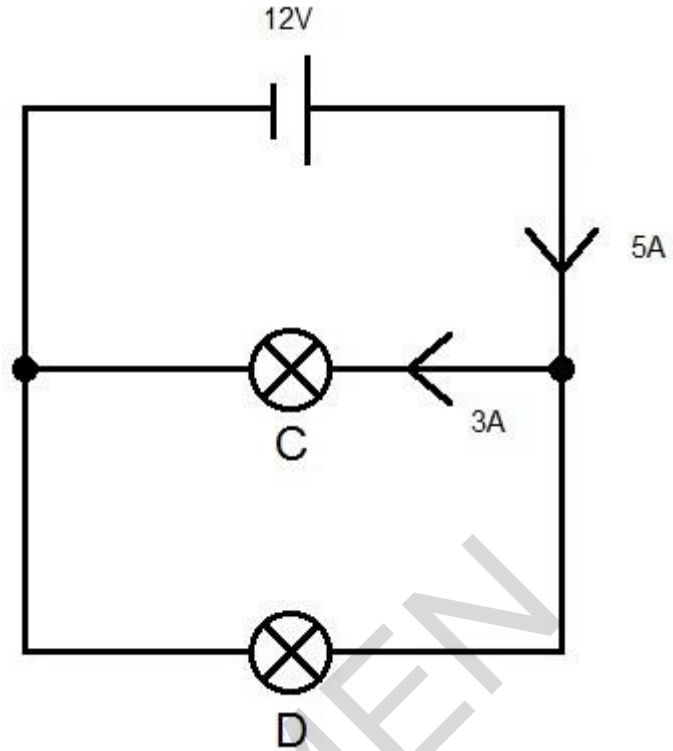
Which row is the correct description of the movement of gear Y?

	direction of rotation	rotations per second
A	anticlockwise	0.5
B	anticlockwise	2.0
C	clockwise	0.5
D	clockwise	2.0

Your answer

[1]

15 Look at the circuit diagram.



Use the formula **resistance = potential difference \div current** to calculate the resistance of bulb **D**.

- A 2 Ω
- B 4 Ω
- C 6 Ω
- D 8 Ω

Your answer

[1]

SECTION B

Answer **all** the questions.

16 Two students study the motion of a toy train on a track.

They need distance and time measurements to calculate speed.

(a) Write down an instrument they could use to measure:

(i) distance: [1]

(ii) time: [1]

(b) The toy train travels for 45 seconds at 2 m/s.

Calculate the distance it travels.

Show your working.

.....

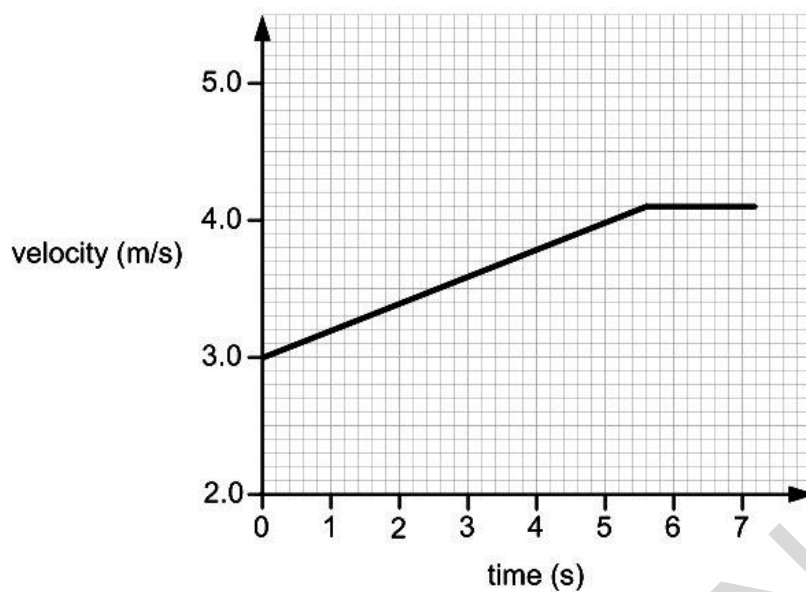
answer: m [4]

(c) The maximum speed of the train is 5 m/s. Its maximum velocity is also 5 m/s.

(i) What is the same about the maximum speed and velocity?
 [1]

(ii) What may be different about the maximum speed and velocity?
 [1]

- (d) The train accelerates and its journey is shown in the graph below.



Use data from the graph to calculate the acceleration.

Show your working.

.....

.....

.....

.....

answer: m/s²

[4]

17 Two students, **A** and **B**, use different methods to see magnetic field patterns.

(a) (i) Describe how student **A** can use a compass to plot a magnetic field pattern.

You may draw a diagram to help you answer this question.

.....

.....

.....

.....

[3]

SPECIMEN

- (ii) Student **B** uses iron filings to show a magnetic field pattern.

Describe how student **B** uses iron filings to show a magnetic field pattern.

You may draw a diagram to help you answer this question.

.....

.....

.....

[2]

- (b) Their teacher prefers students to use the method proposed by student **A**.

Suggest **one** reason why.

.....

.....

[1]

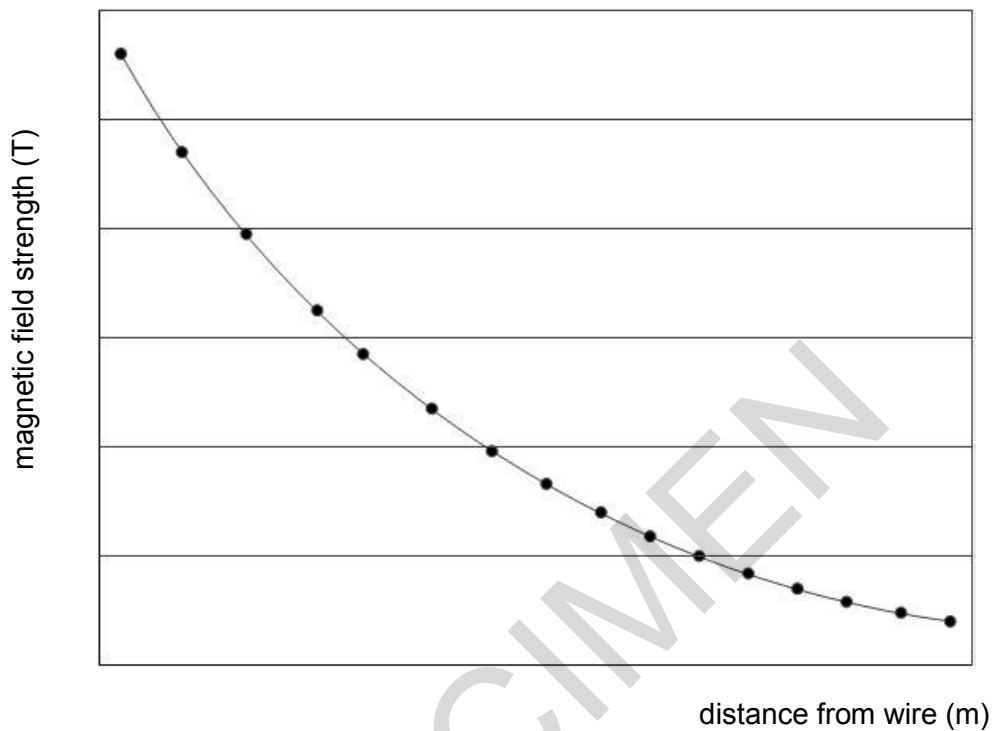
- (c) Sketch the field pattern the students found around a bar magnet.



[2]

- (d) The two students decide to investigate the magnetic effect of a current-carrying wire.

Look at the graph of their results.



What trend does the graph show?

.....

.....

.....

[2]

- 18 Four students investigate the idea of work done.

$$\text{work done} = \text{force} \times \text{distance}$$

Look at their results.

Student	Force (N)	Distance travelled (m)
A	100	5
B	50	10
C	120	12
D	40	4

- (a) Use calculations to show which student does the most work.

.....

[2]

- (b) Which **two** students do the same amount of work?

.....

[1]

- (c) State **two** reasons why it is important to repeat measurements in any experiment.

.....

[2]

- (d) Student **C** takes 0.5 minutes to push the trolley.

How much power do they use?

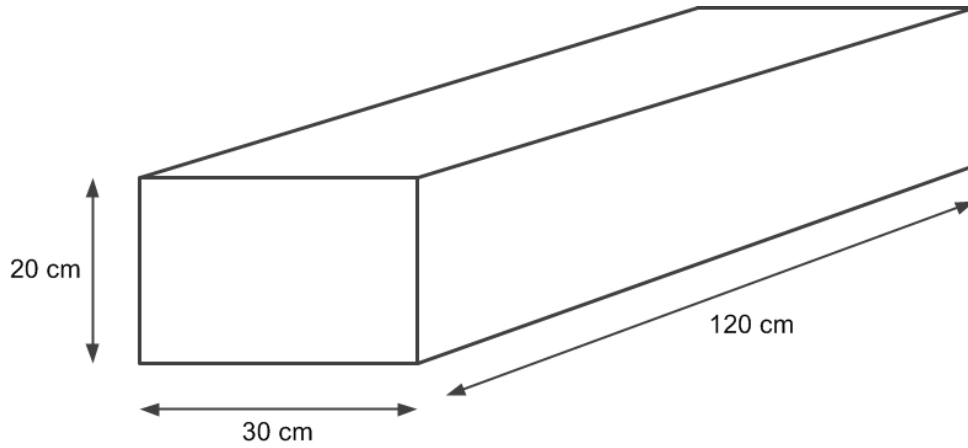
Show your working.

.....

answer:W

[4]

- 19 Wood has a density of 180 kg/m^3 .



Calculate the mass of this piece of wood.

Show your working and give the units.

.....

.....

.....

.....

.....

.....

.....

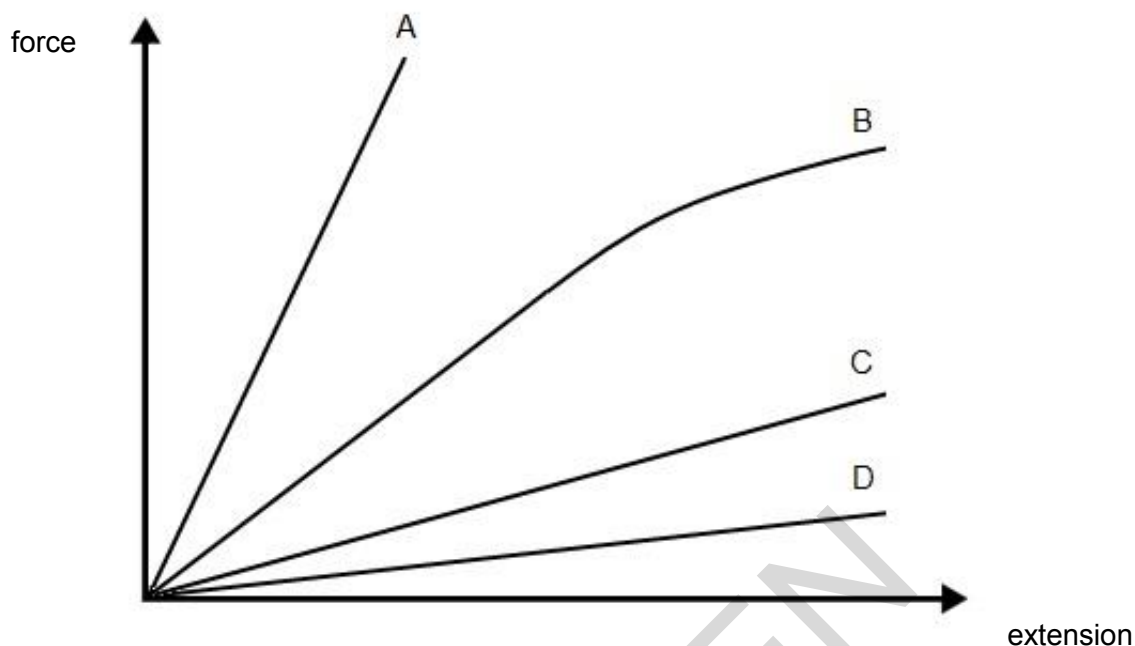
.....

.....

answer: units:.....

[6]

20 The extension of four different springs is shown in the graph.



(a) Explain which of the springs **A**, **B**, **C** or **D** has the highest spring constant?

.....

[2]

(b) Explain why the line for spring **B** has a different shape to the others.

.....

[2]

(c) (i) A spring has a spring constant of 27 N/m.

For an extension of 25 cm, calculate the energy transferred in stretching.

Use the formula: **energy transferred = 0.5 x spring constant x extension²**.

.....

answer: J

[2]

21 A student finds a resistor which has no markings on it.

The student uses a voltmeter, an ammeter and a cell to find the resistance of the resistor.

(a) Draw a circuit diagram the student could use to find the resistance of the resistor.

[3]

(b) In the experiment the current reading is 0.15 A and the potential difference is 2.0 V.

Use the formula: **potential difference = current x resistance**

to calculate the resistance of the unknown resistor.

Show your working.

Record your answer to **3** significant figures.

.....

.....

.....

.....

.....

.....

.....

answer: Ω

[3]

- (c) The students repeat the experiment with different potential differences and currents.

Look at the results.

Potential difference (V)	Current (A) (Attempt 1)	Current (A) (Attempt 2)	Current (A) (Attempt 3)	Mean current (A)
2.0	0.15	0.14	0.16	0.15
4.0	0.31	0.31	0.31	0.31
6.0	0.44	0.44	0.38	0.44
8.0	0.60	0.62	0.58	0.60
10.0	0.74	0.75	0.73	0.74

There is an anomaly in the results.

- (i) Write down the anomaly from the table.

.....
.....

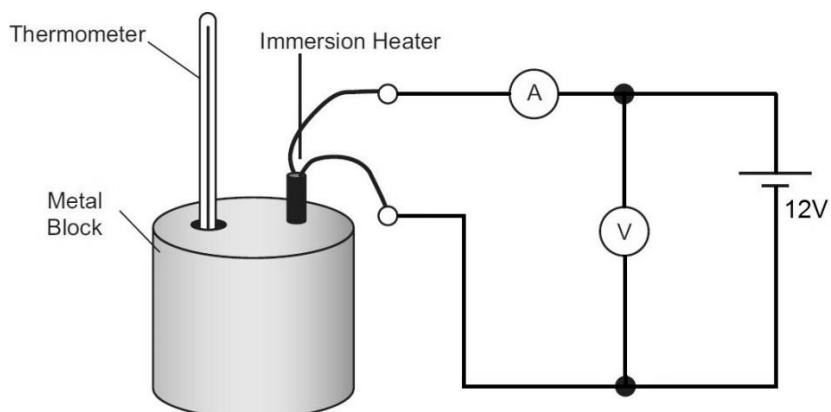
[1]

- (ii) State how the students dealt with the anomaly?

.....
.....

[1]

- 22 A student completes an experiment to find the specific heat capacity of a metal.



- (a) (i) The student takes voltage and current measurements.

Suggest **three** other measurements they need to take?

.....

.....

.....

[3]

- (ii) Describe how these measurements could be used to determine the specific heat capacity of the metal.

.....

.....

.....

[2]

- (b) The value obtained from the experiment is much higher than expected.

Suggest **two** reasons how this could have occurred and suggest **two** improvements to the experimental procedure.

.....

.....

.....

.....

.....

[4]

23 A student rubs a balloon against a scarf.



(a)* Describe how the balloon has become charged.
Suggest a way to show that the balloon is charged. What would you expect to see and why?

.....

.....

.....

.....

.....

.....

.....

.....

.....

.....

.....

.....

.....

.....

.....

.....

.....

.....

.....

.....

.....

.....

[6]

(b) The rate of flow of electrical charge in a circuit is a current.

A current of 40 mA transfers a charge of 3.6 C.

Calculate how long this takes.

Show your working.

.....

.....

.....

answer: seconds

[3]

END OF QUESTION PAPER

SPECIMEN

SPECIMEN

Copyright Information:

Image reproduced by permission from George Retseck. www.georgetretseck.com

OCR is committed to seeking permission to reproduce all third-party content that it uses in the assessment materials. OCR has attempted to identify and contact all copyright holders whose work is used in this paper. To avoid the issue of disclosure of answer-related information to candidates, all copyright acknowledgements are reproduced in the OCR Copyright Acknowledgements booklet. This is produced for each series of examinations and is freely available to download from our public website (www.ocr.org.uk) after the live examination series.

If OCR has unwittingly failed to correctly acknowledge or clear any third-party content in this assessment material, OCR will be happy to correct its mistake at the earliest possible opportunity.

For queries or further information please contact the Copyright Team, First Floor, 9 Hills Road, Cambridge CB2 1GE.

OCR is part of the Cambridge Assessment Group; Cambridge Assessment is the brand name of University of Cambridge Local Examinations Syndicate (UCLES), which is itself a department of the University of Cambridge.

SPECIMEN